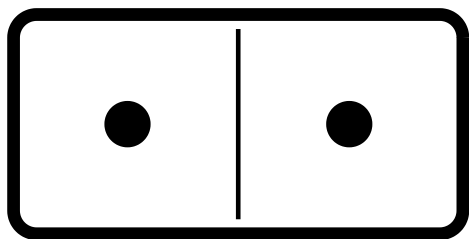


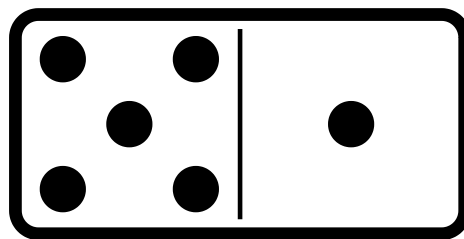
ADDITIONS DE DOMINOS

Écris l'opération qui est sur les dominos, puis trouve le résultat.

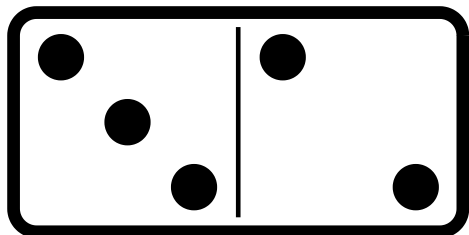
Nom _____



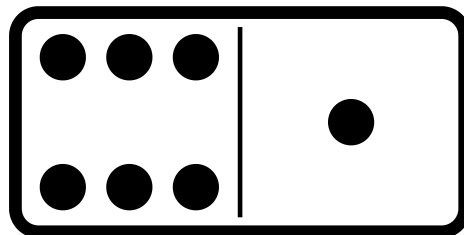
$$\square + \square = \square$$



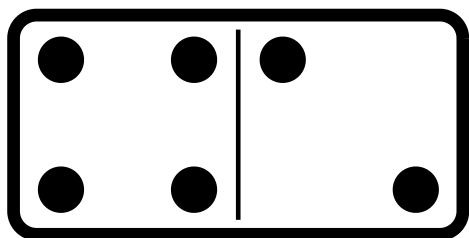
$$\square + \square = \square$$



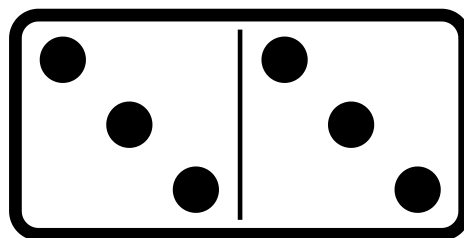
$$\square + \square = \square$$



$$\square + \square = \square$$



$$\square + \square = \square$$



$$\square + \square = \square$$